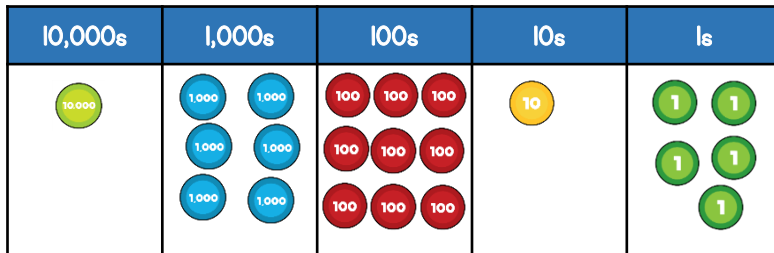


### Answers

- 1 What number is represented below?



16,915

Georgia says that the number is multiple of 5  
Is Georgia correct? Explain your answer.

Yes she is correct because the number has a multiple  
of 5 in its 1s place.

Yes because it is in the 5 times table.

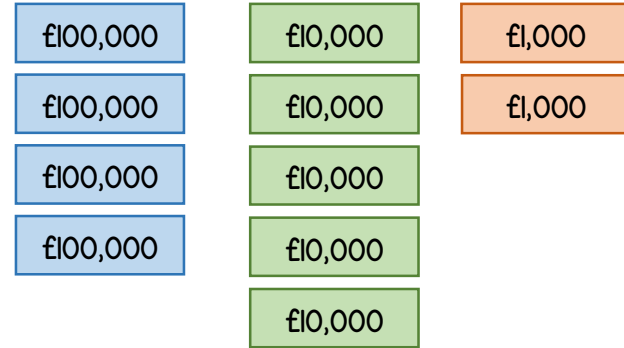
- 2 Complete the missing numbers.

$$47,603 = 40,000 + \underline{7,000} + 600 + 3$$

$$\underline{50,374} = 50,000 + 300 + 70 + 4$$

$$80,000 + 7,000 + \underline{1,300} = 88,300$$

- 3 In a game, people have some play money to buy houses.  
Each person starts with the following play money.



How much money do they each start with?

£ 452,000

- 4 Circle all the numbers that round to 4,750 to the nearest 10

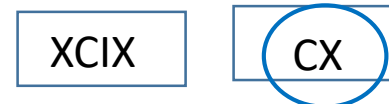


- 5 What is the missing number?

305,700		
300,000	?	700

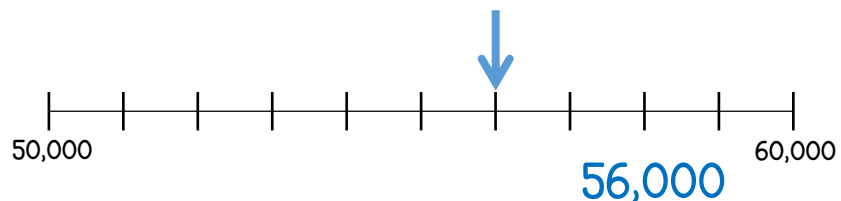
5,000

- 6 Which is the greater number? Explain your answer.

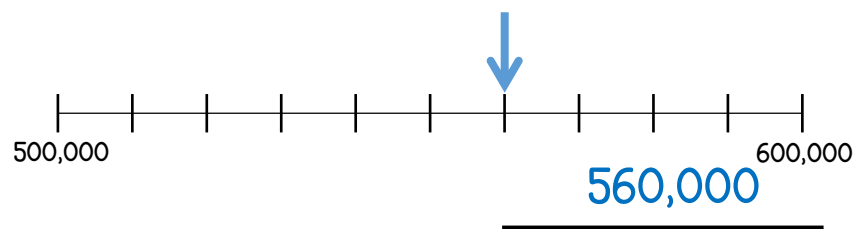


XCIX is 99 and CX is 110. Explanation needed for the mark.

7 What numbers are shown by the arrows?




1 mark




1 mark

8 Complete the following using  $<$ ,  $>$  or  $=$

12,900  $>$  2,980

57,000  $<$  570,000

999,999  $<$  1 million

9 Arrange the digit cards to make an **odd** number between 70,000 and 100,000



Range of possible answers. All will be begin with 8 or 9.

Round your number to the nearest 1,000

Round your number to the nearest 10,000

1 mark

1 mark

1 mark

10 Complete the missing numbers.

19	10,019	20,019	30,019	40,019	50,019
----	--------	--------	--------	--------	--------

1 mark

11 Put the following weights in order starting with the smallest.

A 700,000 kg

B 87,000 kg

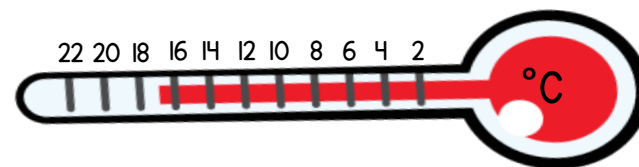
C Ninety-four thousand kg

D 399,458 kg

B      C      D      A  
smallest

1 mark

12 The thermometer shows the temperature in London in May.



In January the temperature was 20 degrees colder.  
What was the temperature in London in January?

-3 °C

1 mark

Circle how confident you feel with place value.

1      2      3      4      5  
Not      Very  
confident      confident